

# Rechnen mit + in der Zahlenmauer

Hier musst Du die nebeneinander liegenden Felder zusammenrechnen (+).  
Das Ergebnis steht dann auf dem Stein über den beiden Zahlen.

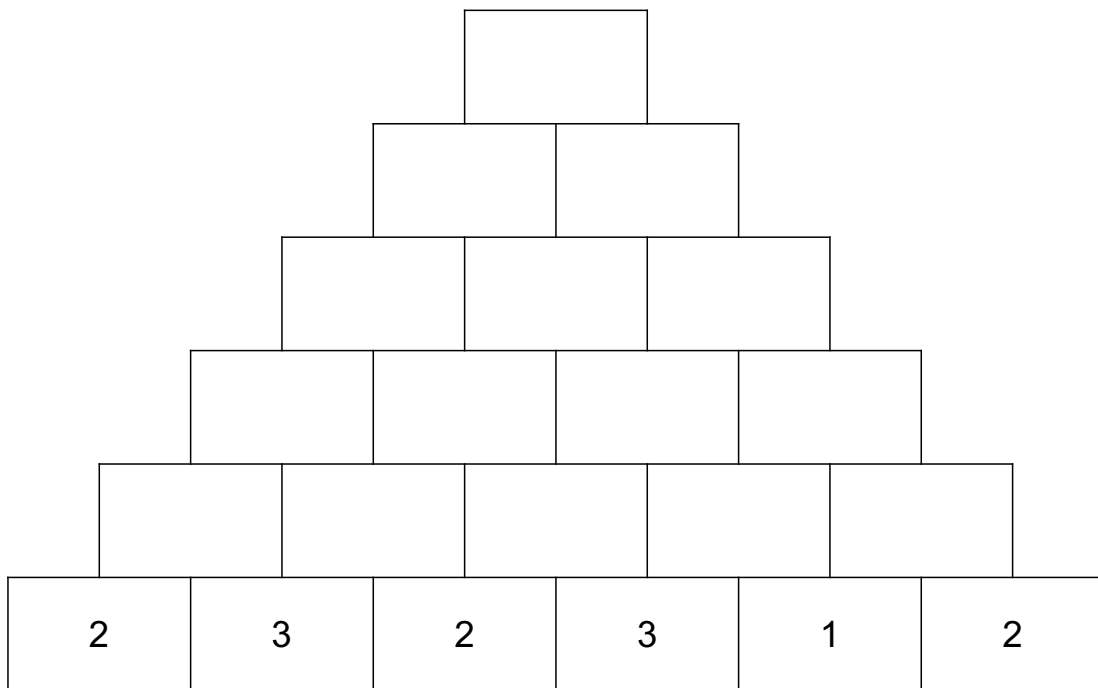
**Beispiel:**

$2+4=6$   
 Also kommt in die obere Lücke eine 6

$1+1=2$   
 Also kommt in die Lücke darüber eine 2

$1+3=4$   
 Also kommt in die Lücke eine 3

Trage die fehlenden Ergebnisse ein!  
Unten kannst Du vergleichen, ob Du alle Ergebnisse hast.

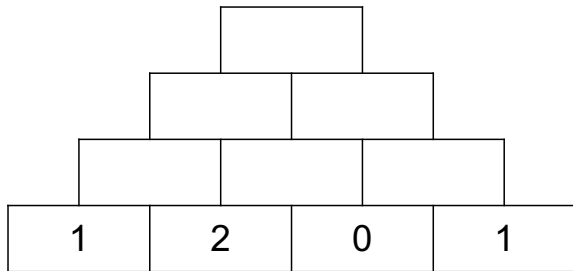


39, 10, 16, 5, 35, 3, 10, 5, 5, 7, 9, 19, 74, 20, 4

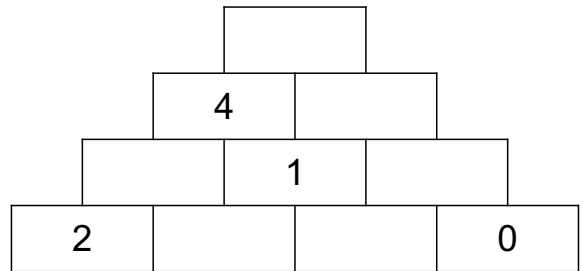
Mach genau so auf den nächsten Seiten weiter!



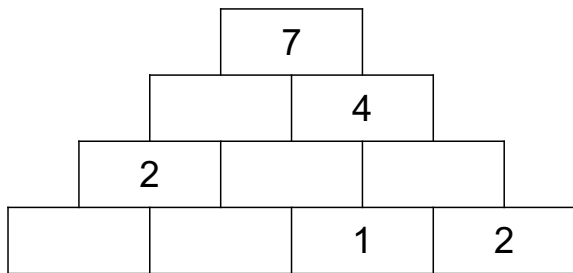
Trage die fehlenden Ergebnisse ein!  
Unten kannst Du vergleichen, ob Du alle Ergebnisse hast.



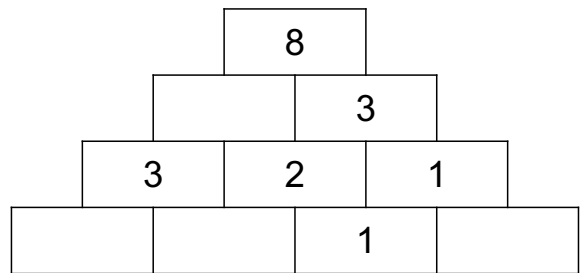
2, 5, 8, 1, 3, 3



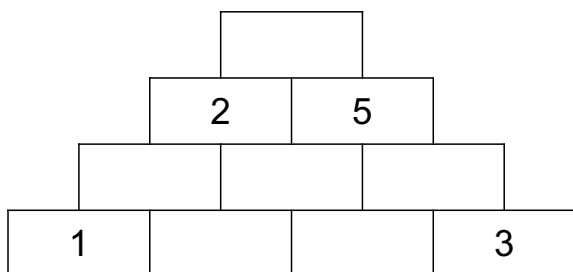
0, 1, 1, 3, 5, 0



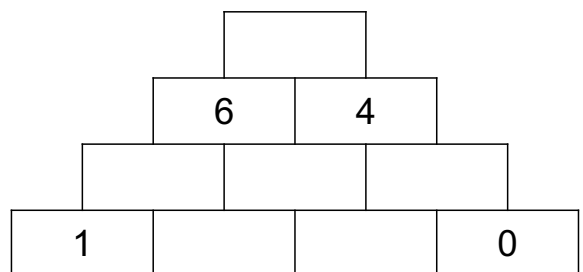
2, 3, 3, 1, 0



1, 5, 0, 2



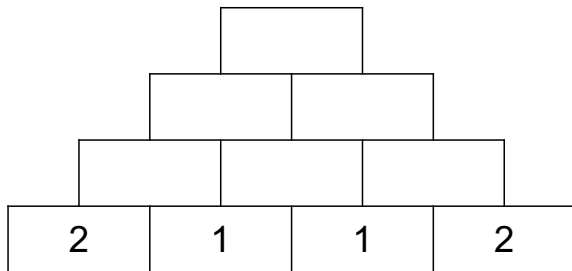
7, 0, 1, 1, 4, 1



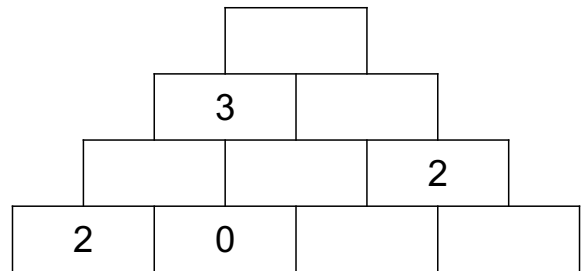
2, 1, 3, 10, 1, 3



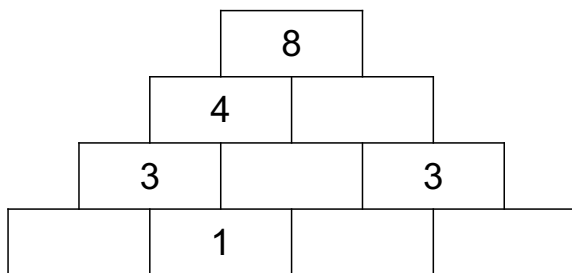
Trage die fehlenden Ergebnisse ein!  
Unten kannst Du vergleichen, ob Du alle Ergebnisse hast.



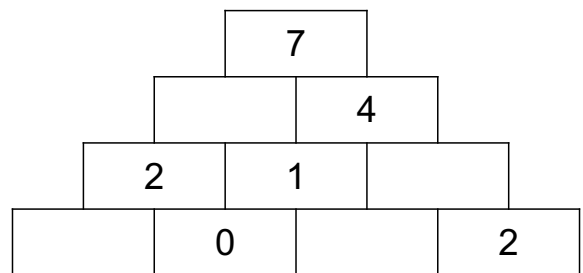
10, 2, 5, 3, 3, 5



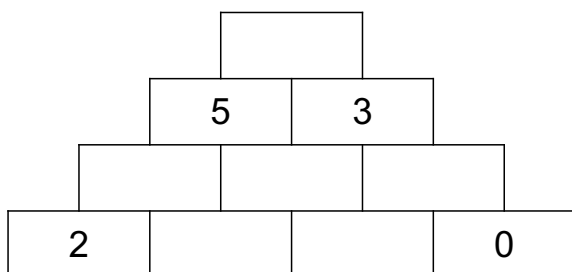
1, 6, 1, 1, 3, 2



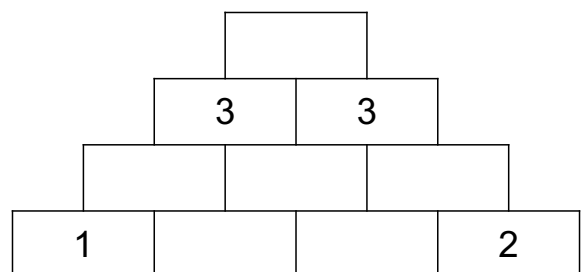
2, 4, 3, 0, 1



3, 1, 3, 2



1, 2, 1, 1, 3, 8

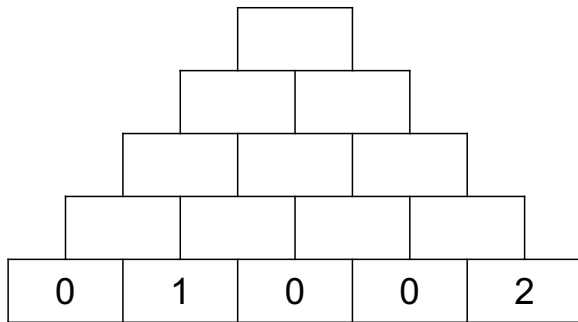


1, 2, 0, 1, 6, 2

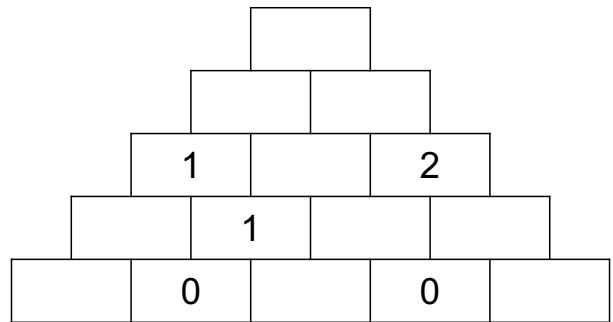




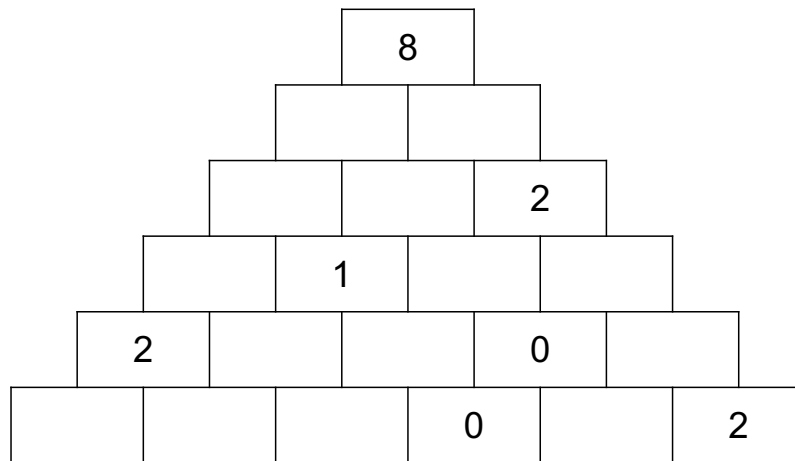
Trage die fehlenden Ergebnisse ein!  
Unten kannst Du vergleichen, ob Du alle Ergebnisse hast.



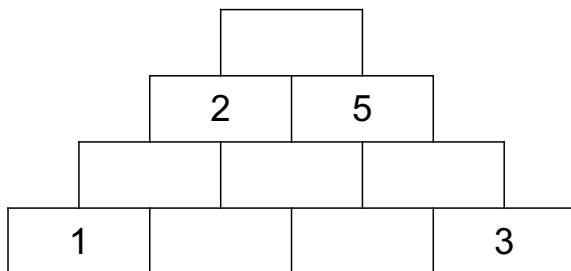
1, 2, 6, 1, 3, 3, 1, 0, 2, 2



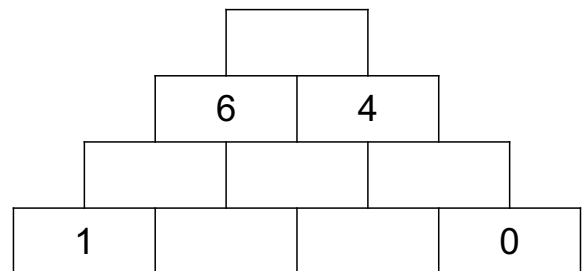
1, 0, 2, 1, 7, 1, 0, 1, 4, 3



5, 1, 0, 0, 0, 1, 0, 1, 4, 3, 2, 2, 1, 3



0, 4, 1, 1, 1, 7

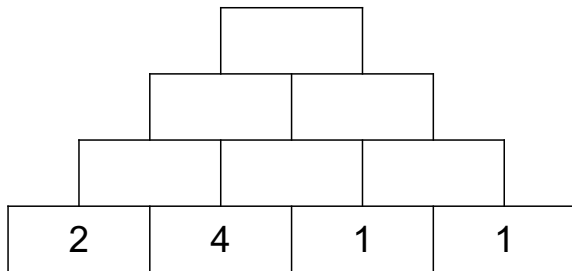


10, 3, 2, 3, 1,

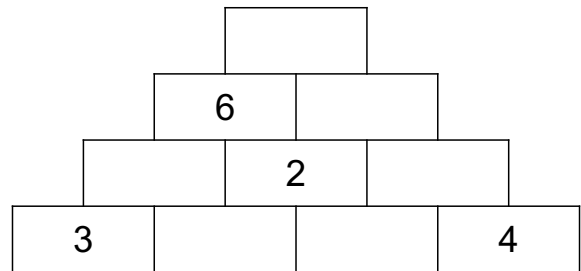




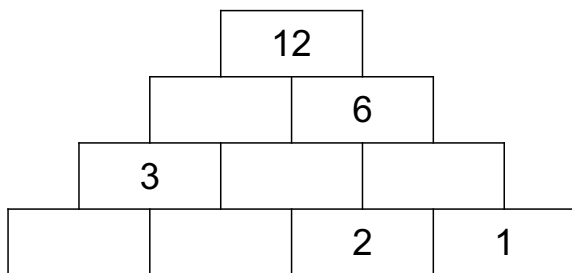
Trage die fehlenden Ergebnisse ein!  
Unten kannst Du vergleichen, ob Du alle Ergebnisse hast.



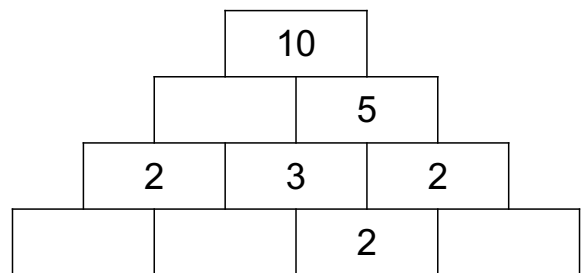
7, 18, 11, 5, 2, 6



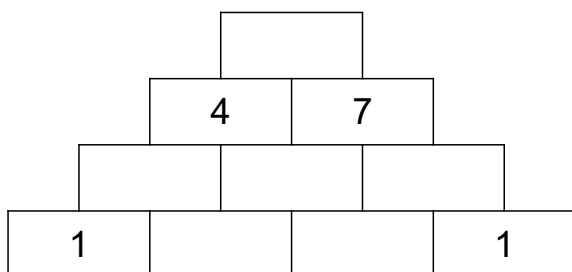
1, 13, 7, 5, 4, 1



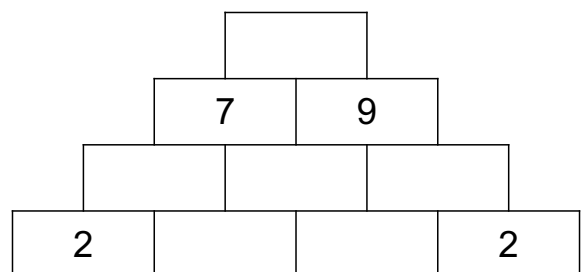
1, 3, 6, 3, 2



5, 1, 0, 1



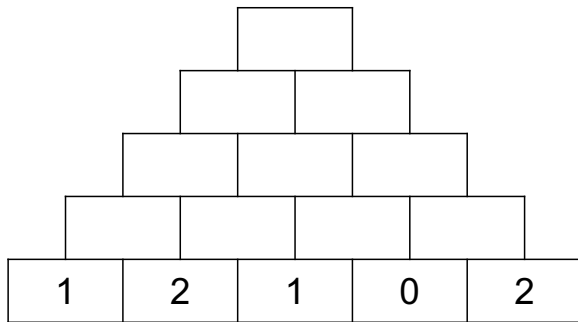
3, 1, 11, 3, 4, 0



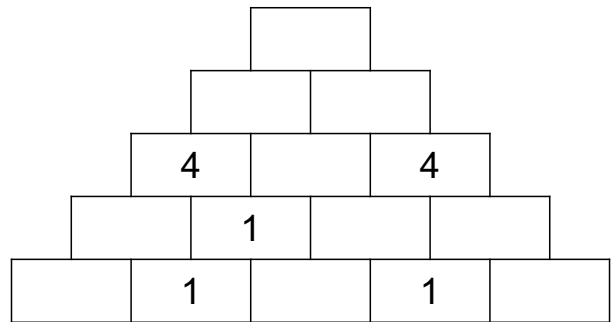
4, 16, 3, 5, 3, 1



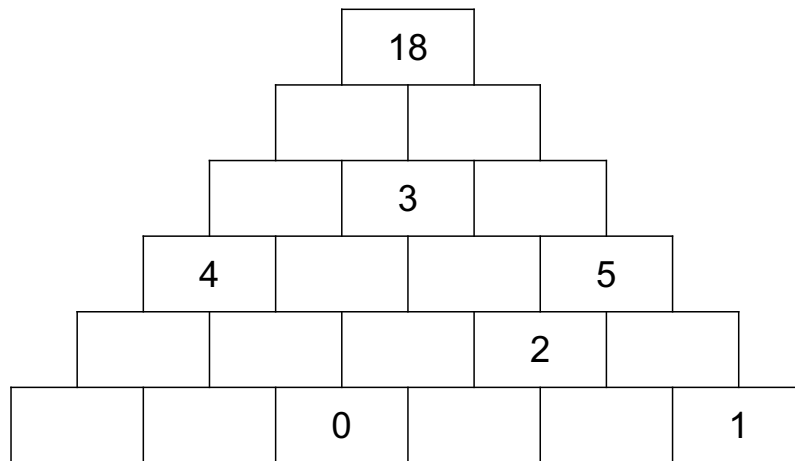
Trage die fehlenden Ergebnisse ein!  
Unten kannst Du vergleichen, ob Du alle Ergebnisse hast.



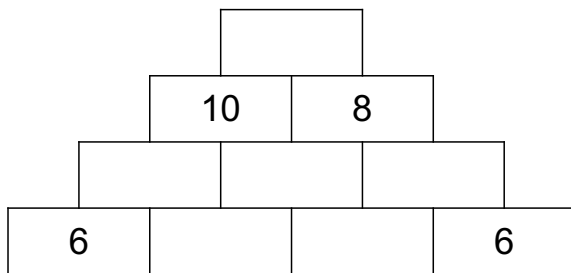
1, 2, 4, 10, 17, 7, 6, 3, 3, 3



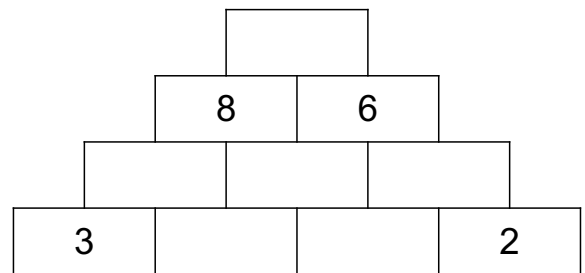
3, 2, 0, 12, 2, 1, 6, 3, 6, 2



10, 3, 0, 2, 5, 0, 7, 2, 1, 1, 8, 2, 1, 3



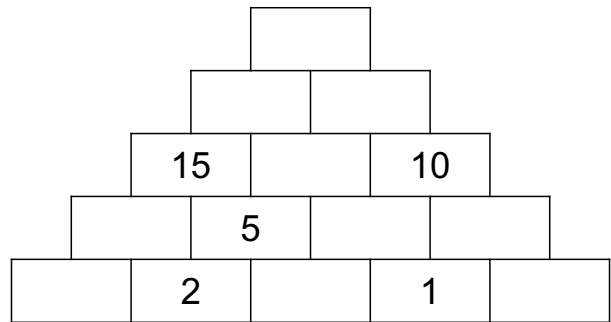
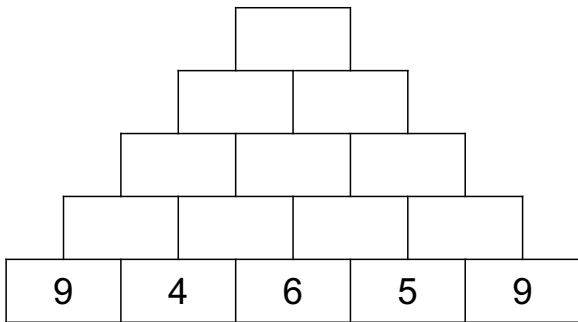
18, 0, 2, 2, 8, 6



1, 14, 3, 5, 3, 2

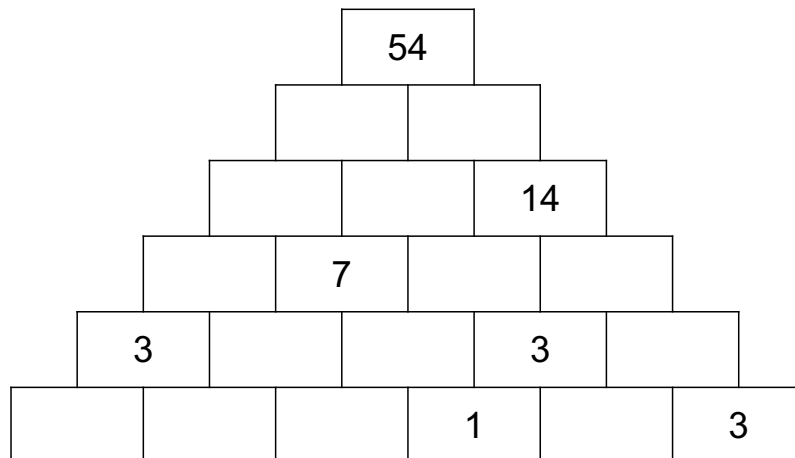


Trage die fehlenden Ergebnisse ein!  
Unten kannst Du vergleichen, ob Du alle Ergebnisse hast.

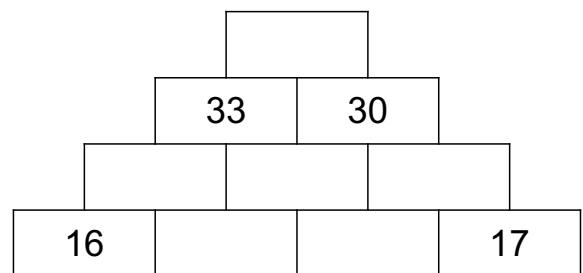
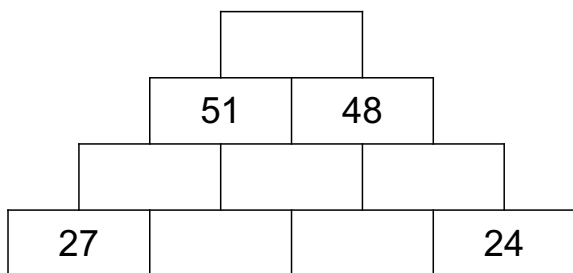


10, 44, 21, 23, 90, 46, 25, 14, 11, 13

10, 8, 4, 43, 24, 9, 6, 19, 3, 5



27, 4, 2, 5, 27, 3, 2, 2, 6, 13, 8, 14, 1, 7



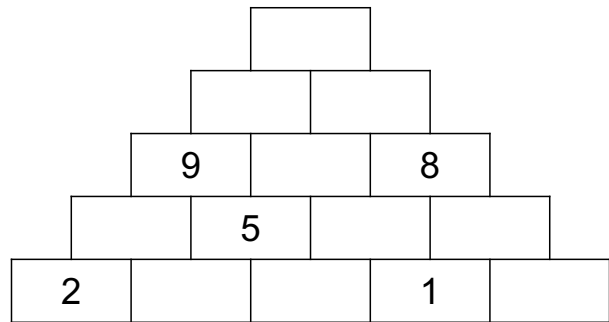
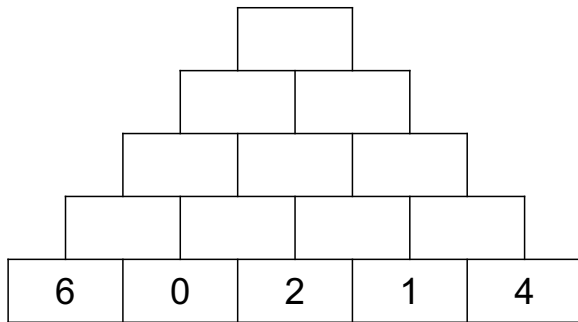
16, 32, 99, 8, 8, 35

20, 23, 7, 3, 63, 10



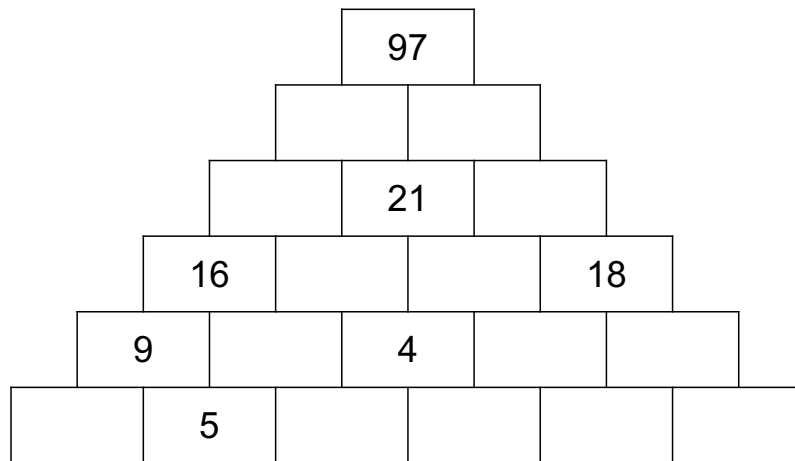


Trage die fehlenden Ergebnisse ein!  
Unten kannst Du vergleichen, ob Du alle Ergebnisse hast.

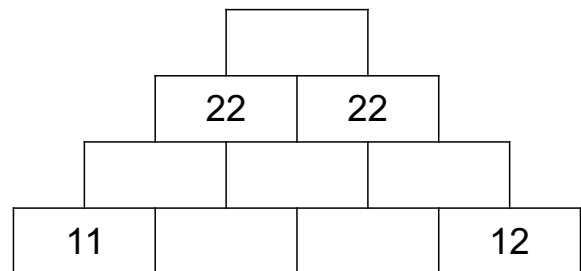
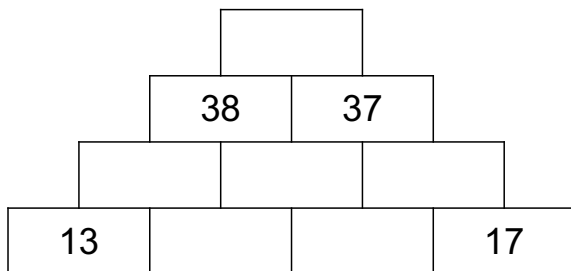


3, 26, 6, 8, 13, 8, 2, 5, 13, 5

35, 4, 3, 3, 2, 17, 9, 18, 4, 4



7, 48, 2, 6, 49, 8, 2, 10, 4, 28, 11, 27, 4, 12



15, 75, 22, 10, 5, 23

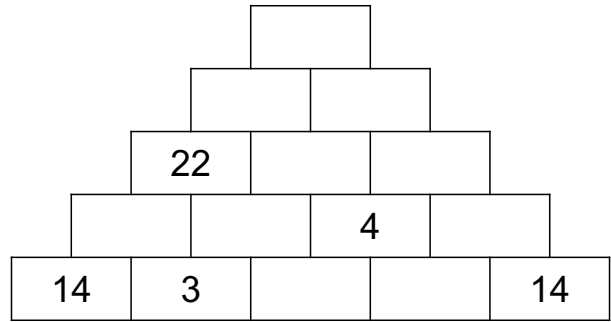
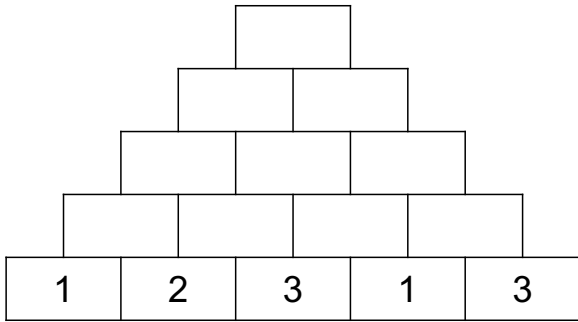
44, 4, 15, 3, 7, 15





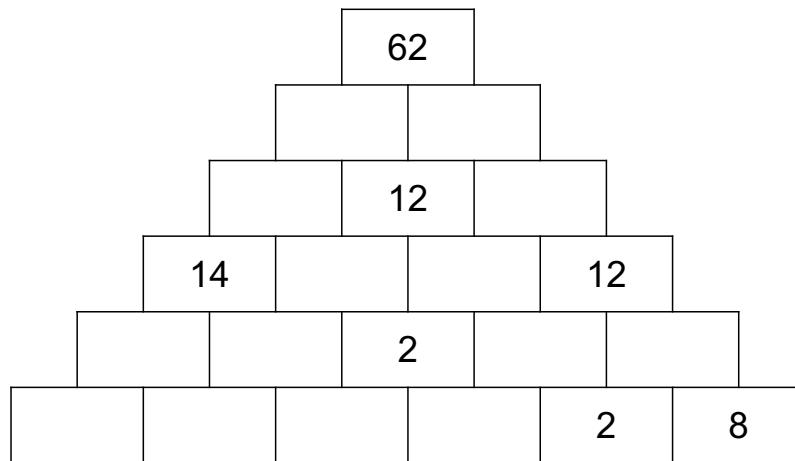


Trage die fehlenden Ergebnisse ein!  
Unten kannst Du vergleichen, ob Du alle Ergebnisse hast.

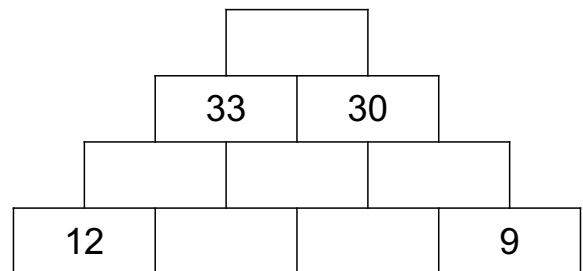
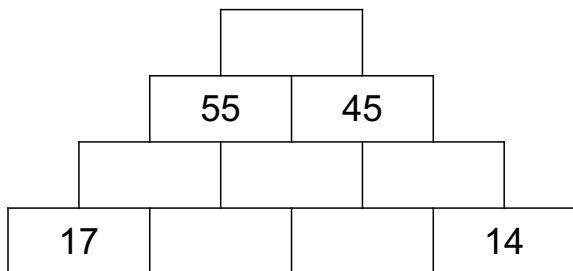


17, 17, 8, 34, 4, 5, 8, 3, 9, 4

2, 5, 29, 17, 9, 16, 31, 2, 20, 60



6, 8, 4, 10, 22, 8, 16, 4, 2, 2, 34, 4, 0, 28



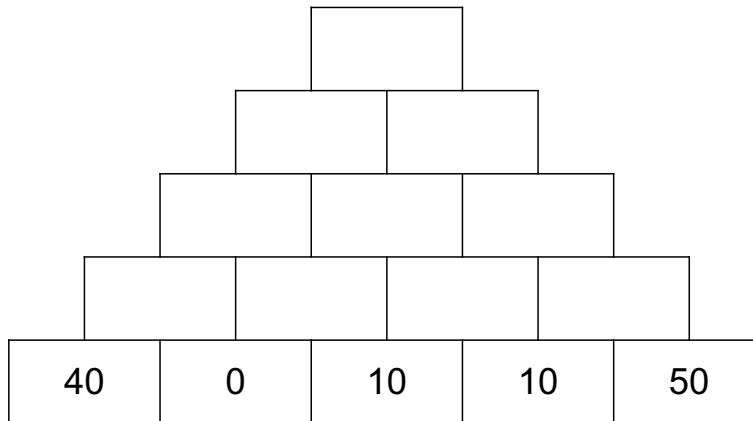
23, 22, 15, 100, 32, 8

19, 14, 7, 7, 16, 63

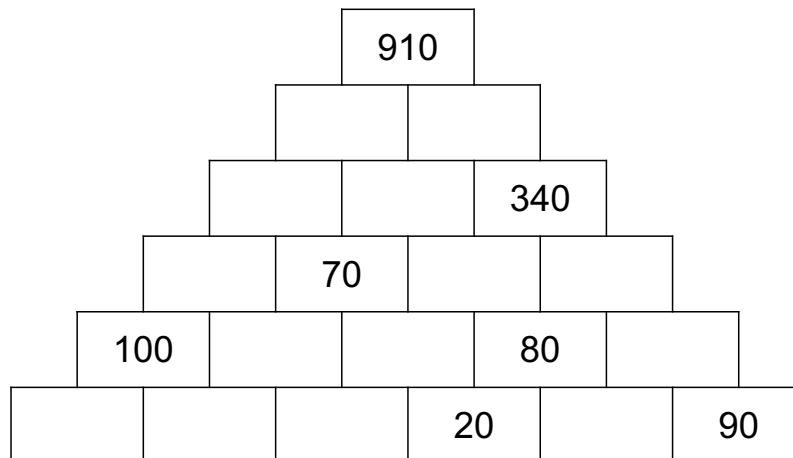




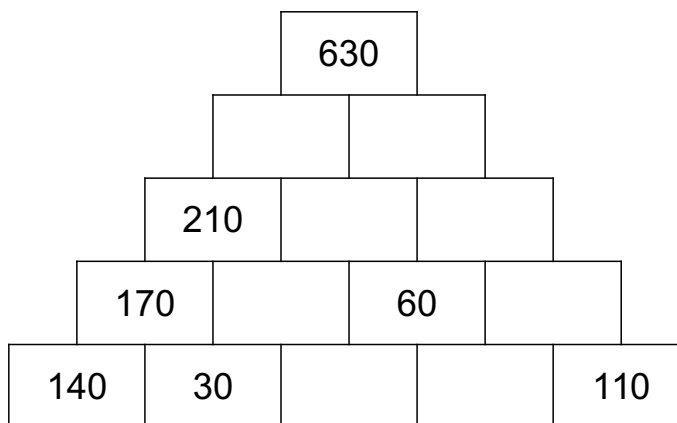
Trage die fehlenden Ergebnisse ein!  
Unten kannst Du vergleichen, ob Du alle Ergebnisse hast.



40, 190, 110, 30, 60, 10, 80, 80, 20, 50



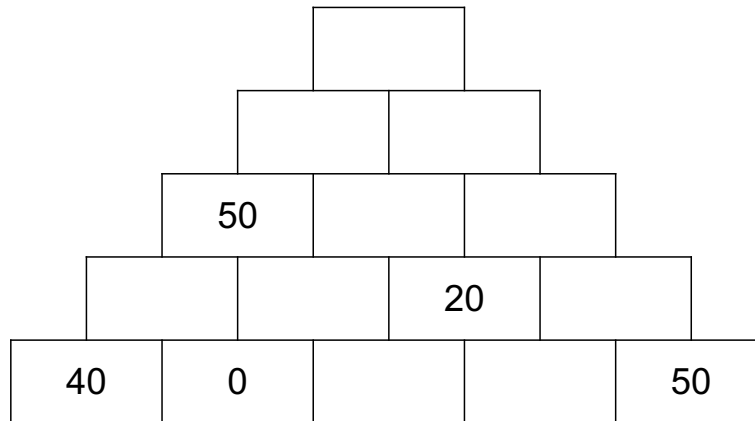
230, 210, 30, 150, 40, 10, 390, 110, 140, 520, 30, 180, 60, 70



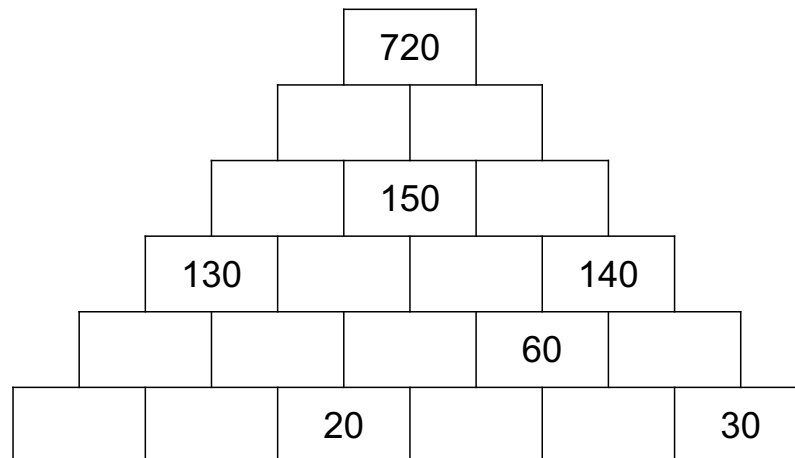
40, 310, 100, 220, 50, 160, 320, 10



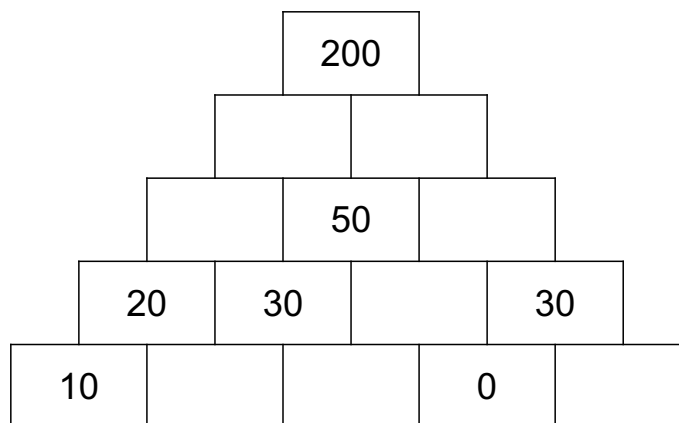
Trage die fehlenden Ergebnisse ein!  
Unten kannst Du vergleichen, ob Du alle Ergebnisse hast.



10, 80, 110, 190, 60, 80, 40, 10, 30, 10



90, 90, 80, 380, 50, 10, 30, 340, 10, 100, 190, 60, 230, 30

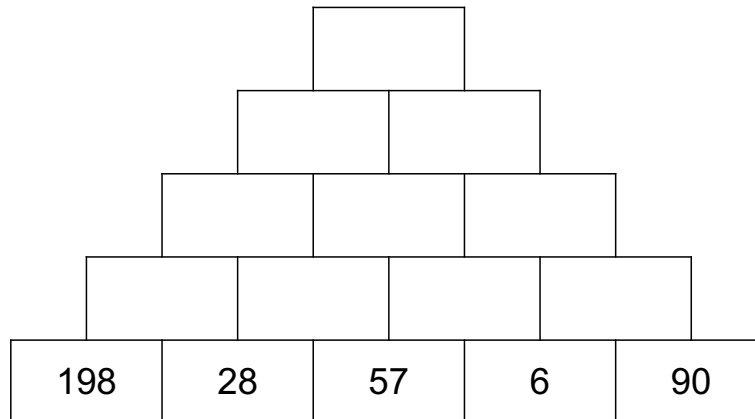


20, 50, 100, 50, 100, 20, 10, 30

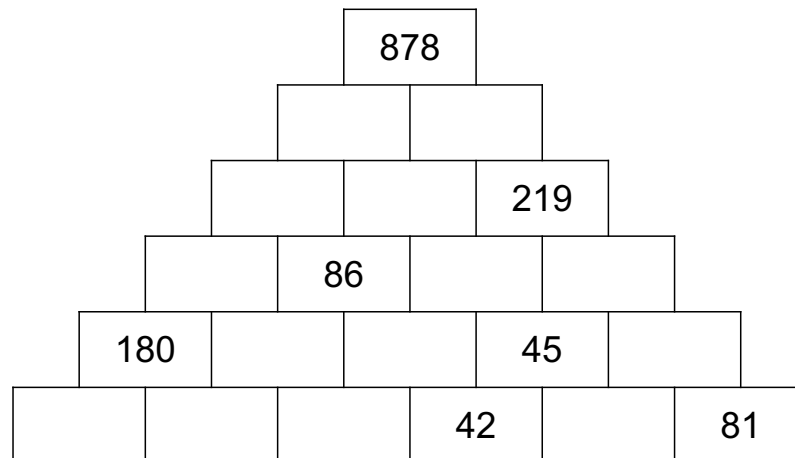




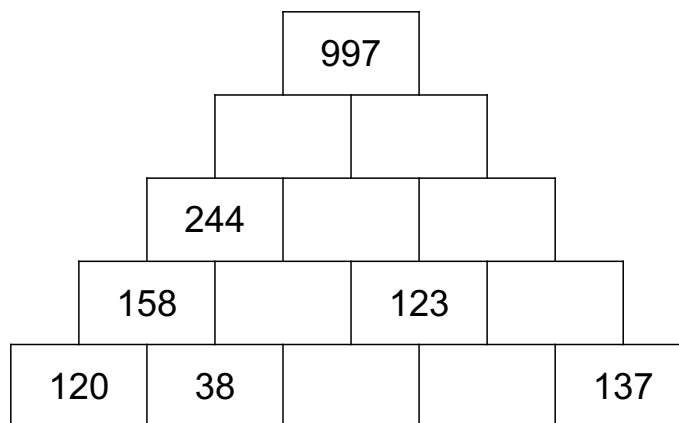
Trage die fehlenden Ergebnisse ein!  
Unten kannst Du vergleichen, ob Du alle Ergebnisse hast.



85, 766, 148, 159, 311, 226, 459, 63, 307, 96



129, 307, 395, 3, 142, 3, 483, 45, 176, 221, 84, 38, 41, 90



86, 453, 209, 48, 335, 212, 544, 75



# Rechnen mit + in der Zahlenmauer

Hier musst Du die nebeneinander liegenden Felder zusammenrechnen (+). Das Ergebnis steht dann auf dem Stein über den beiden Zahlen.

**Beispiel:**

$2+4=6$   
Also kommt in die obere Lücke eine 6

↓


$1+1=2$   
Also kommt in die Lücke darüber eine 2

↙

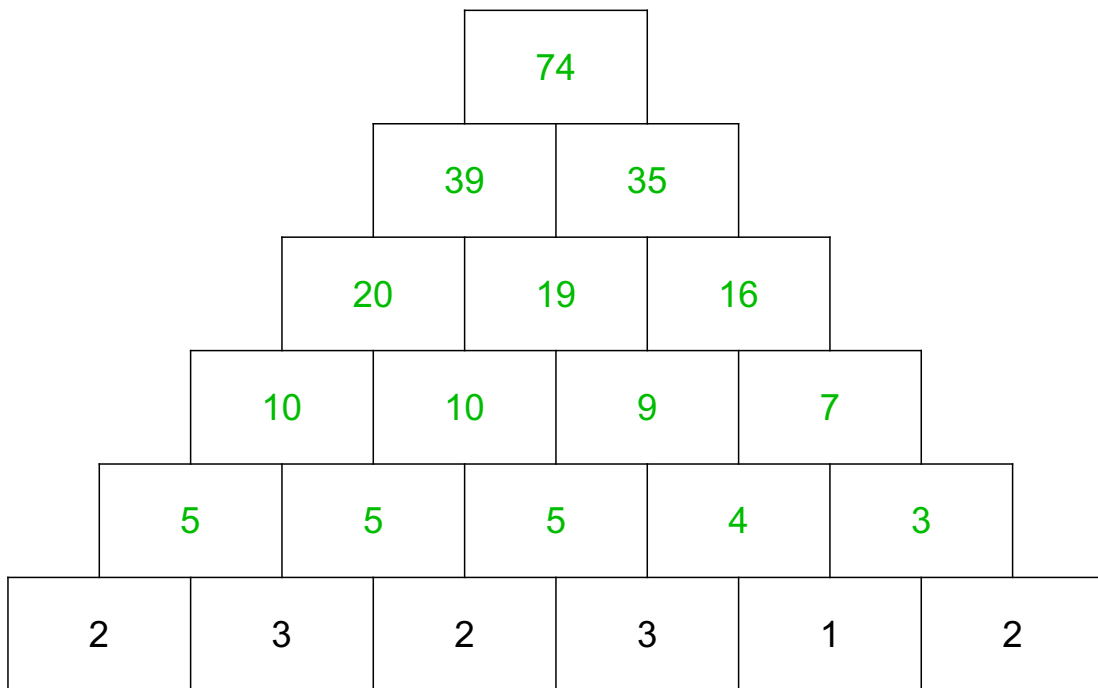
6		
2	4	
1	1	3

$1+3=4$   
Also kommt in die Lücke eine 3

↘



Trage die fehlenden Ergebnisse ein!  
Unten kannst Du vergleichen, ob Du alle Ergebnisse hast.

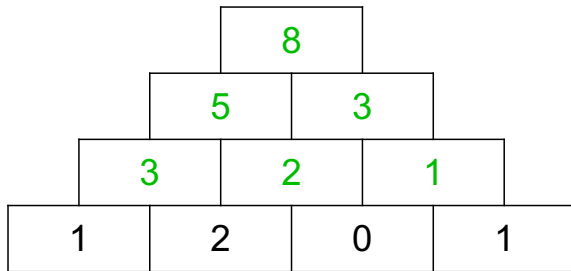


39, 10, 16, 5, 35, 3, 10, 5, 5, 7, 9, 19, 74, 20, 4

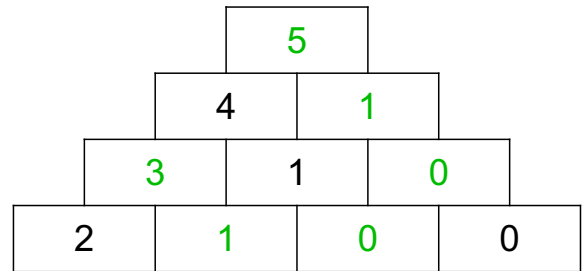
Mach genau so auf den nächsten Seiten weiter!



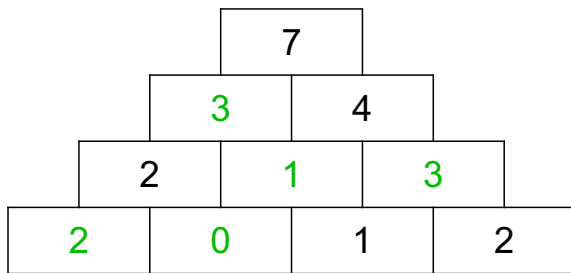
Trage die fehlenden Ergebnisse ein!  
Unten kannst Du vergleichen, ob Du alle Ergebnisse hast.



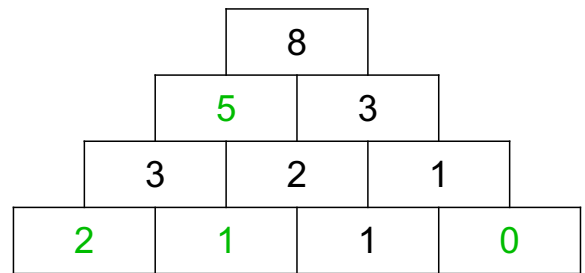
2, 5, 8, 1, 3, 3



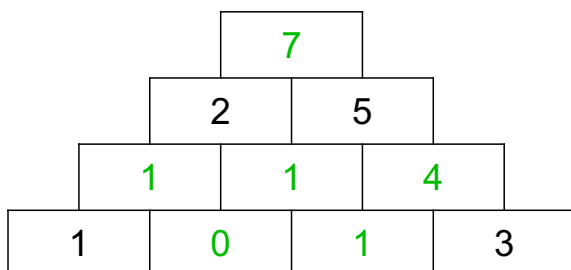
0, 1, 1, 3, 5, 0



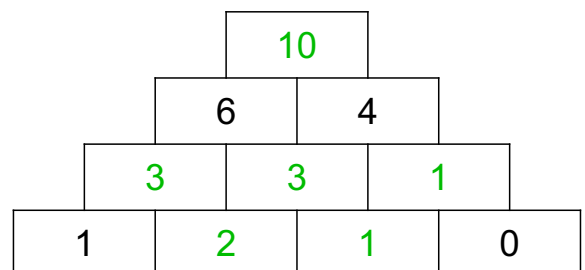
2, 3, 3, 1, 0



1, 5, 0, 2



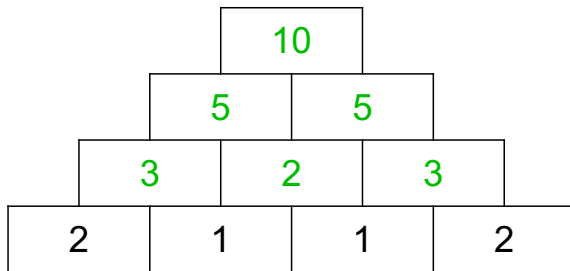
7, 0, 1, 1, 4, 1



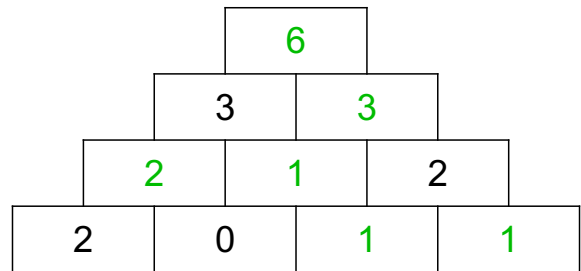
2, 1, 3, 10, 1, 3



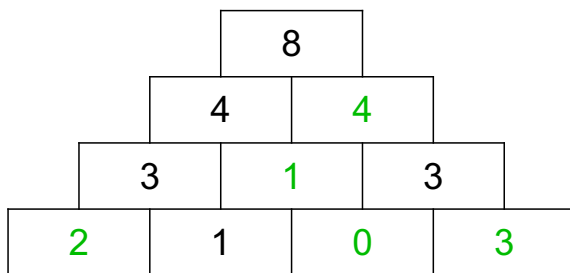
Trage die fehlenden Ergebnisse ein!  
Unten kannst Du vergleichen, ob Du alle Ergebnisse hast.



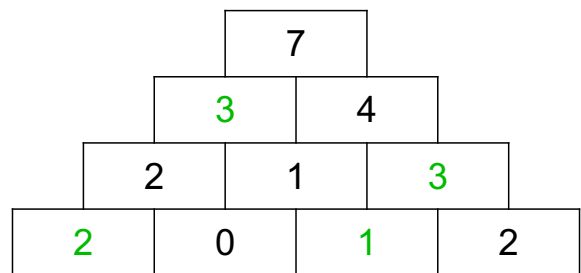
10, 2, 5, 3, 3, 5



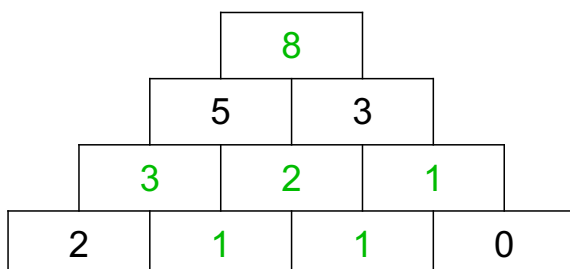
1, 6, 1, 1, 3, 2



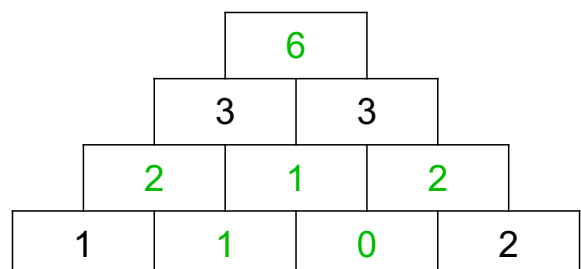
2, 4, 3, 0, 1



3, 1, 3, 2



1, 2, 1, 1, 3, 8

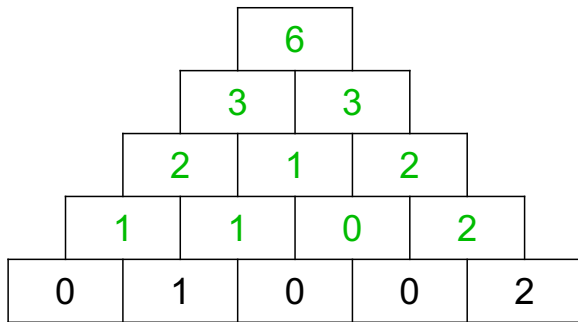


1, 2, 0, 1, 6, 2

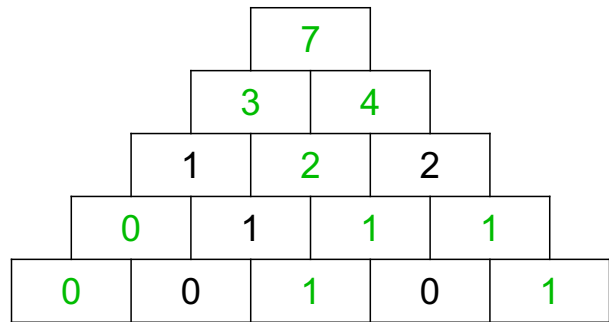




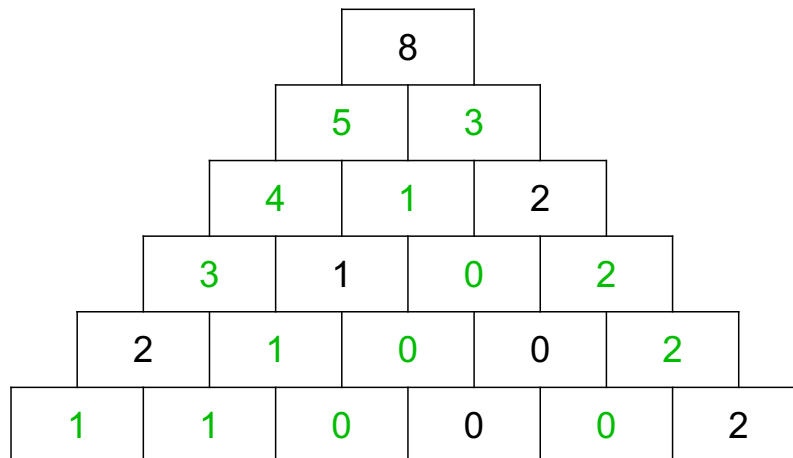
Trage die fehlenden Ergebnisse ein!  
Unten kannst Du vergleichen, ob Du alle Ergebnisse hast.



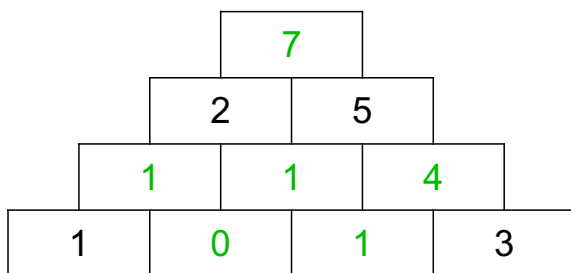
1, 2, 6, 1, 3, 3, 1, 0, 2, 2



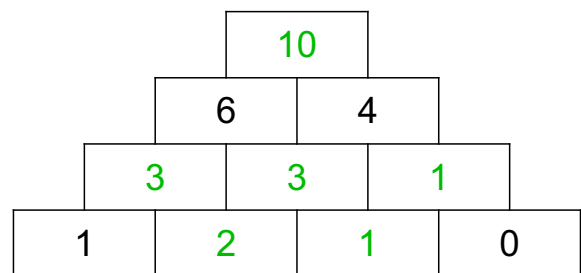
1, 0, 2, 1, 7, 1, 0, 1, 4, 3



5, 1, 0, 0, 0, 1, 0, 1, 4, 3, 2, 2, 1, 3



0, 4, 1, 1, 1, 7



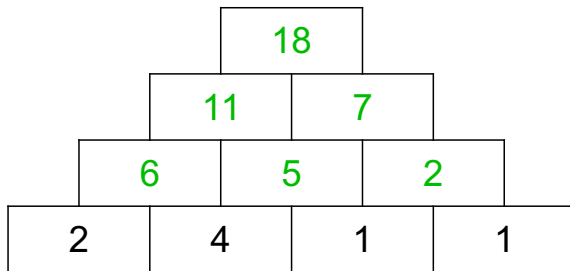
10, 3, 2, 3, 1,



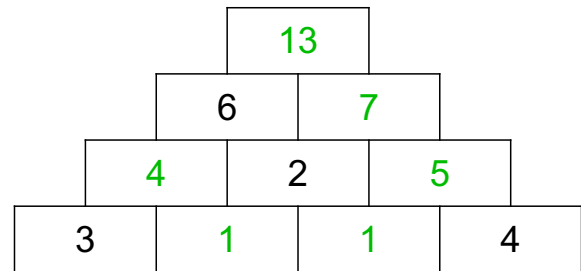




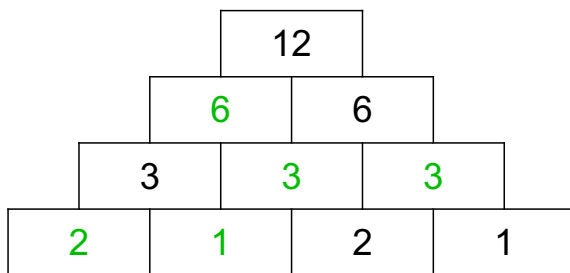
Trage die fehlenden Ergebnisse ein!  
Unten kannst Du vergleichen, ob Du alle Ergebnisse hast.



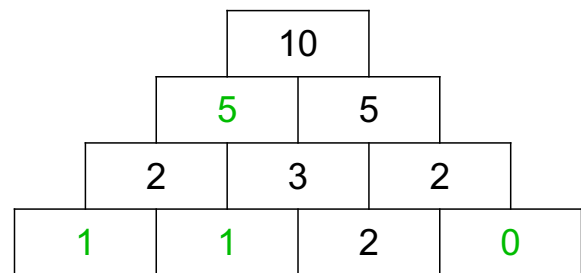
7, 18, 11, 5, 2, 6



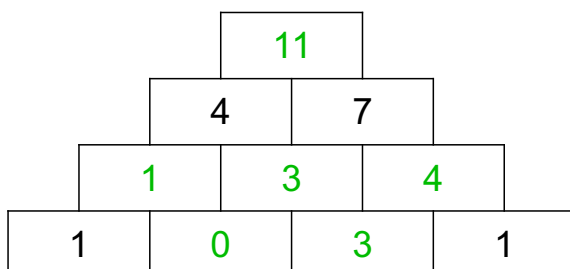
1, 13, 7, 5, 4, 1



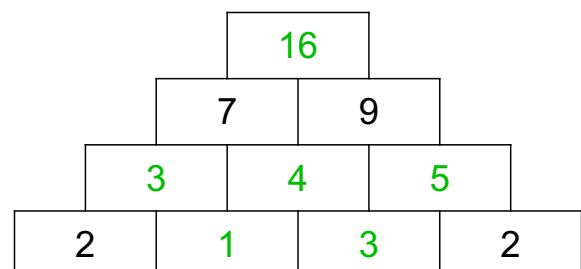
1, 3, 6, 3, 2



5, 1, 0, 1



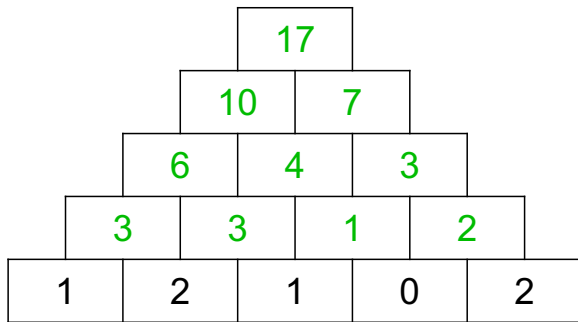
3, 1, 11, 3, 4, 0



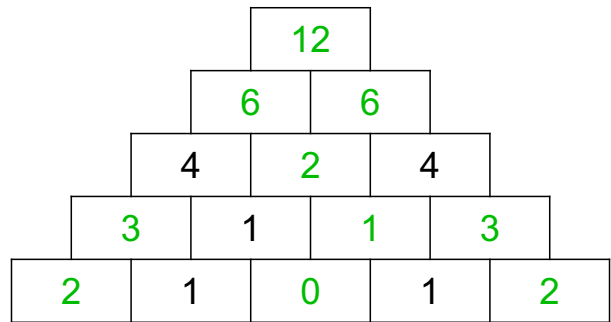
4, 16, 3, 5, 3, 1



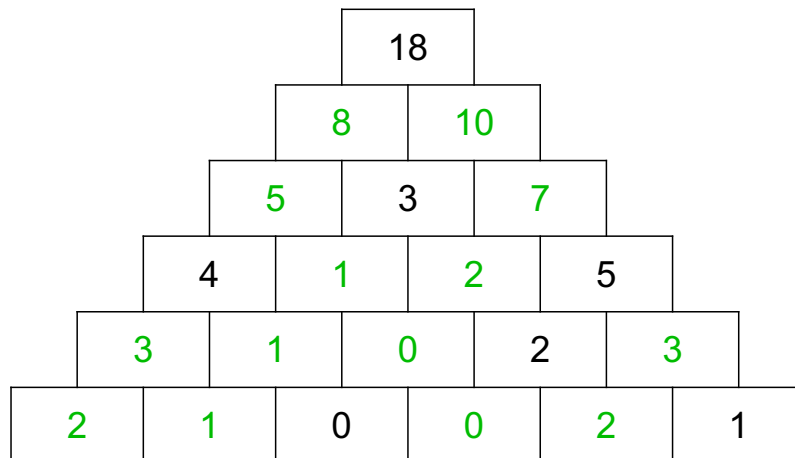
Trage die fehlenden Ergebnisse ein!  
Unten kannst Du vergleichen, ob Du alle Ergebnisse hast.



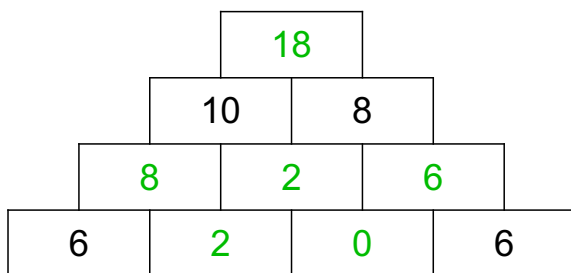
1, 2, 4, 10, 17, 7, 6, 3, 3, 3



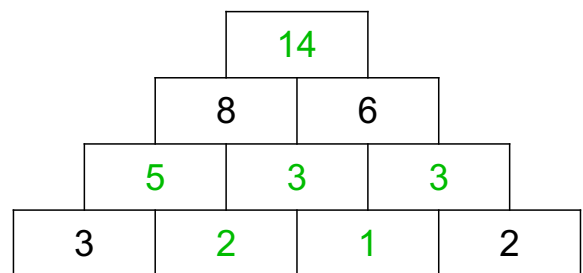
3, 2, 0, 12, 2, 1, 6, 3, 6, 2



10, 3, 0, 2, 5, 0, 7, 2, 1, 1, 8, 2, 1, 3



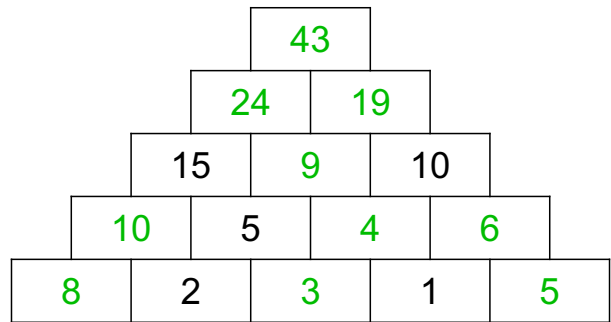
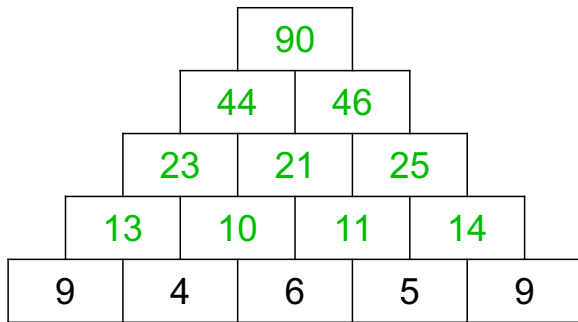
18, 0, 2, 2, 8, 6



1, 14, 3, 5, 3, 2

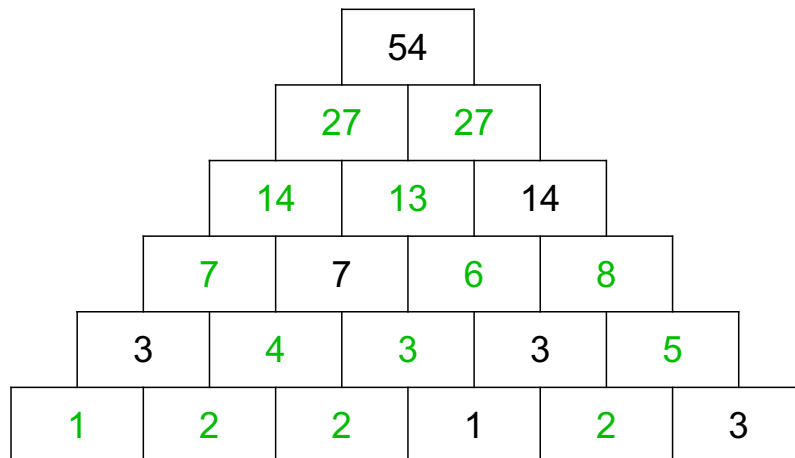


Trage die fehlenden Ergebnisse ein!  
Unten kannst Du vergleichen, ob Du alle Ergebnisse hast.

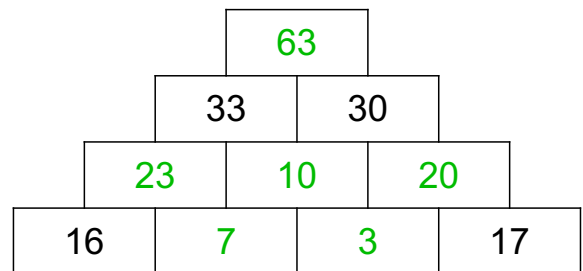
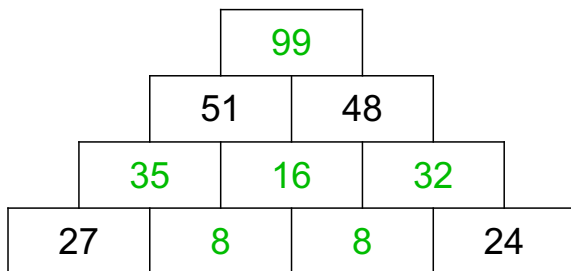


10, 44, 21, 23, 90, 46, 25, 14, 11, 13

10, 8, 4, 43, 24, 9, 6, 19, 3, 5



27, 4, 2, 5, 27, 3, 2, 2, 6, 13, 8, 14, 1, 7



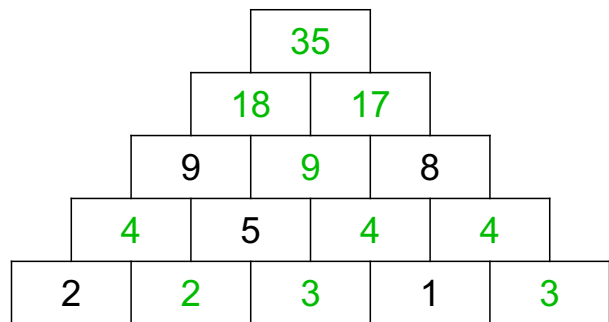
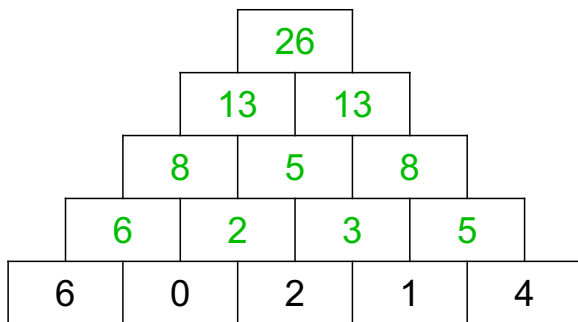
16, 32, 99, 8, 8, 35

20, 23, 7, 3, 63, 10



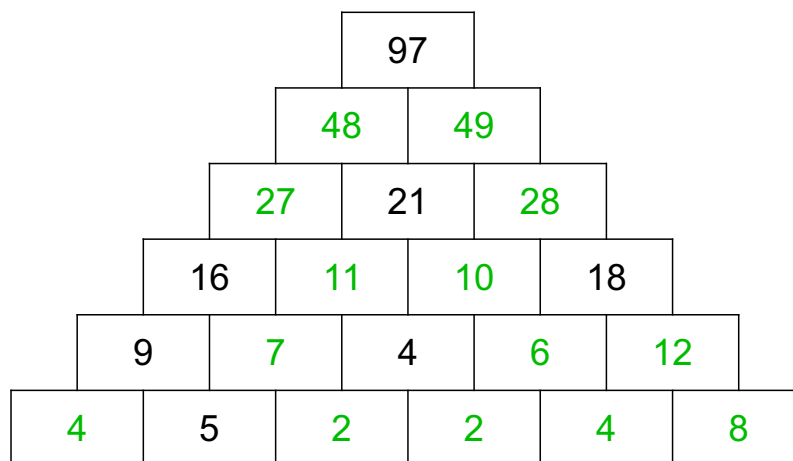


Trage die fehlenden Ergebnisse ein!  
Unten kannst Du vergleichen, ob Du alle Ergebnisse hast.

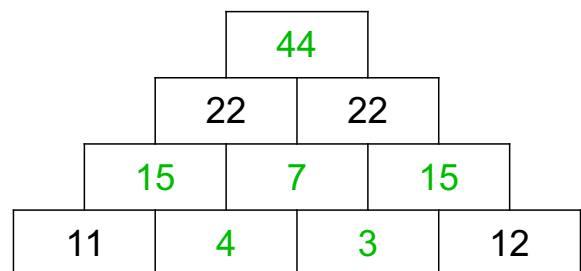
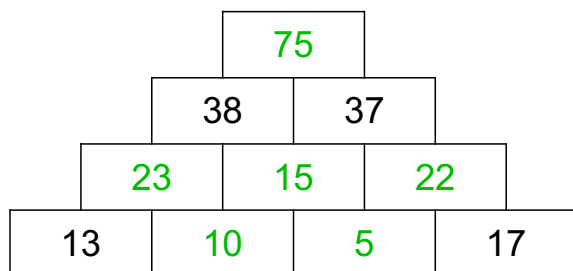


3, 26, 6, 8, 13, 8, 2, 5, 13, 5

35, 4, 3, 3, 2, 17, 9, 18, 4, 4



7, 48, 2, 6, 49, 8, 2, 10, 4, 28, 11, 27, 4, 12



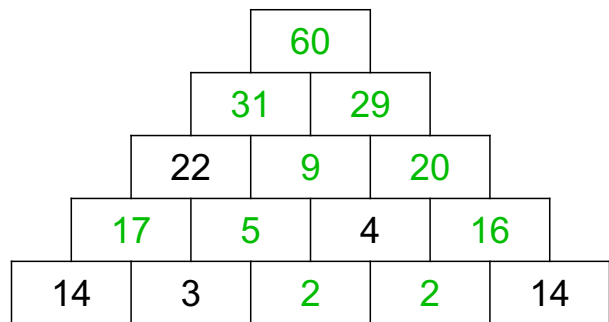
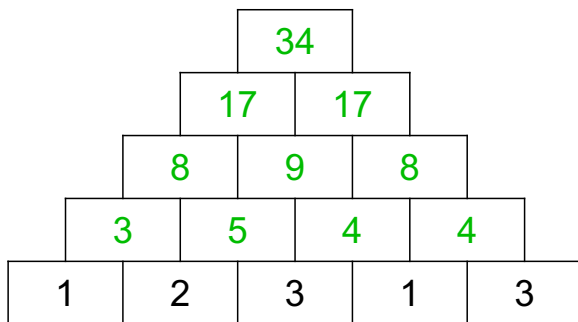
15, 75, 22, 10, 5, 23

44, 4, 15, 3, 7, 15



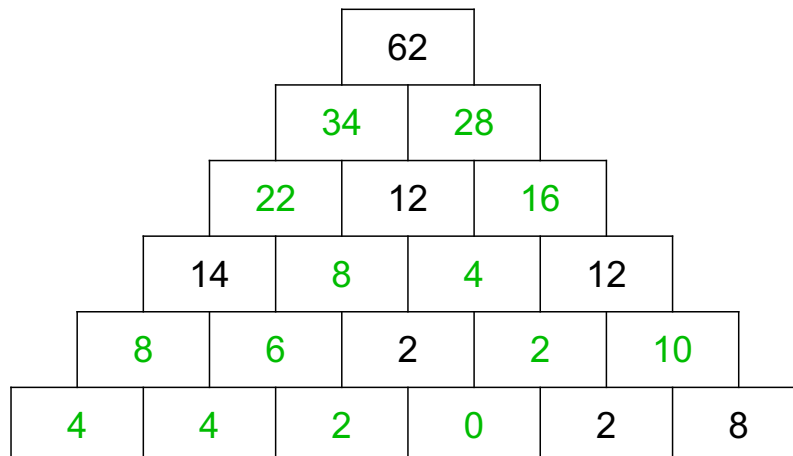


Trage die fehlenden Ergebnisse ein!  
Unten kannst Du vergleichen, ob Du alle Ergebnisse hast.

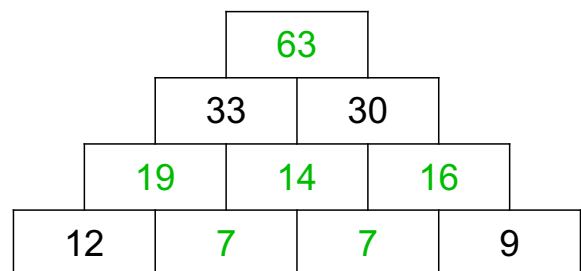
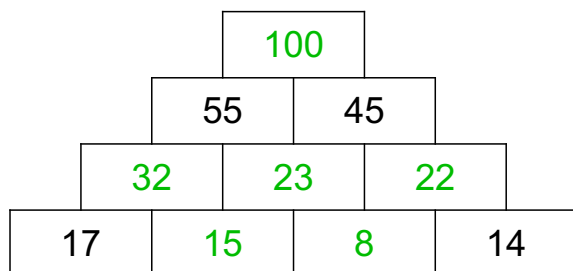


17, 17, 8, 34, 4, 5, 8, 3, 9, 4

2, 5, 29, 17, 9, 16, 31, 2, 20, 60



6, 8, 4, 10, 22, 8, 16, 4, 2, 2, 34, 4, 0, 28



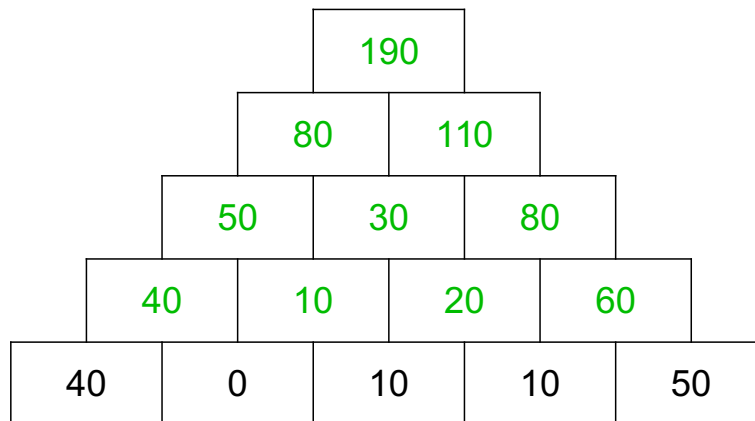
23, 22, 15, 100, 32, 8

19, 14, 7, 7, 16, 63

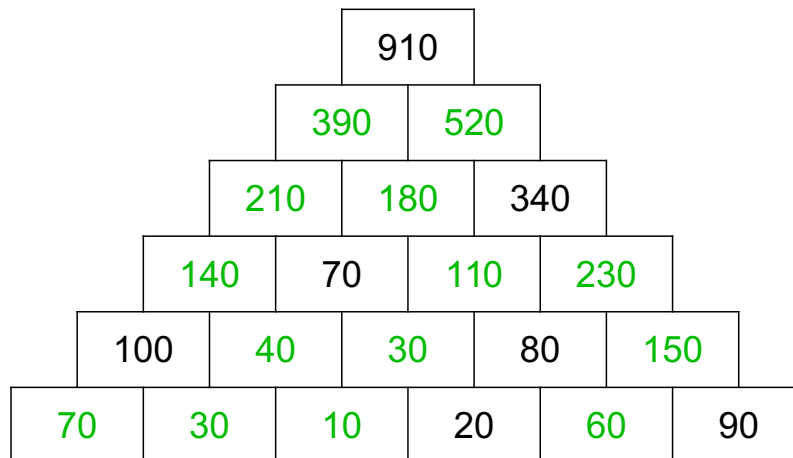




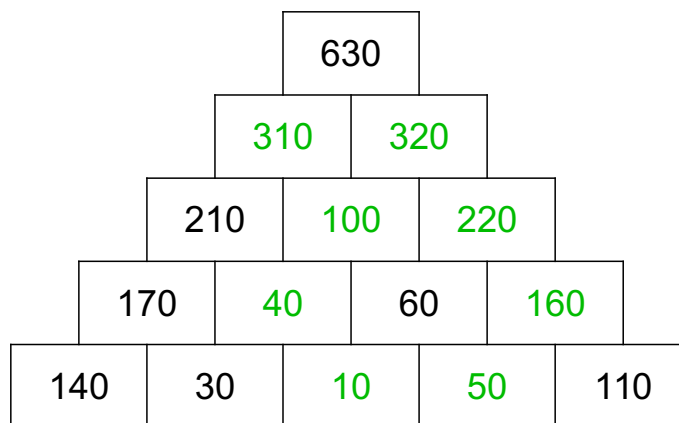
Trage die fehlenden Ergebnisse ein!  
Unten kannst Du vergleichen, ob Du alle Ergebnisse hast.



40, 190, 110, 30, 60, 10, 80, 80, 20, 50



230, 210, 30, 150, 40, 10, 390, 110, 140, 520, 30, 180, 60, 70

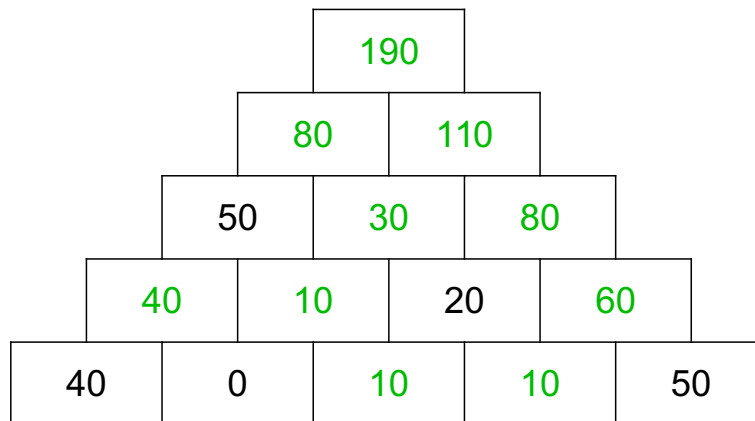


40, 310, 100, 220, 50, 160, 320, 10

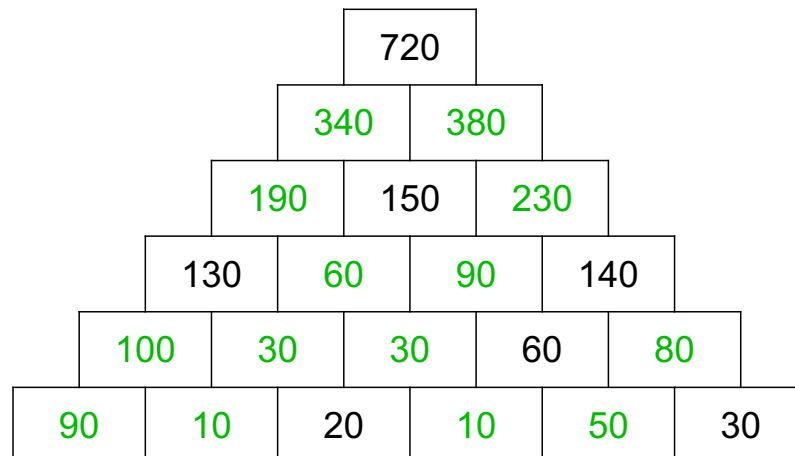




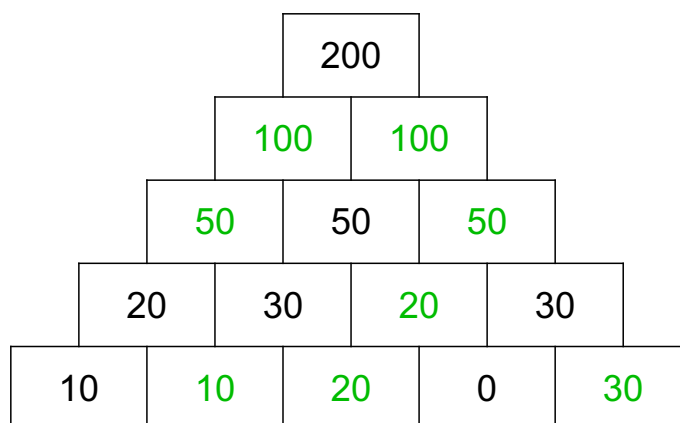
Trage die fehlenden Ergebnisse ein!  
Unten kannst Du vergleichen, ob Du alle Ergebnisse hast.



10, 80, 110, 190, 60, 80, 40, 10, 30, 10



90, 90, 80, 380, 50, 10, 30, 340, 10, 100, 190, 60, 230, 30

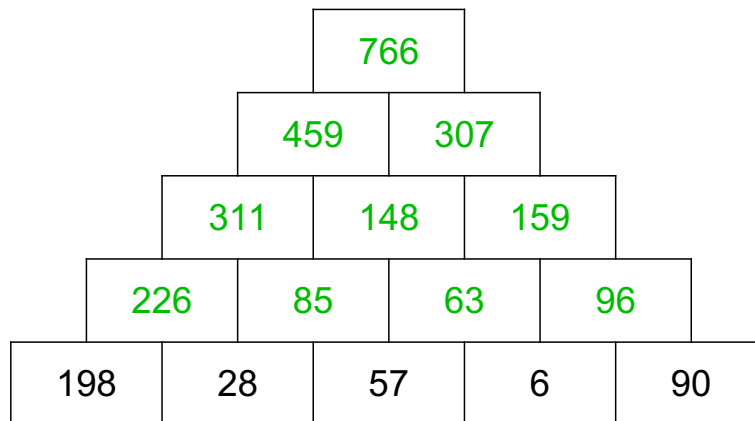


20, 50, 100, 50, 100, 20, 10, 30

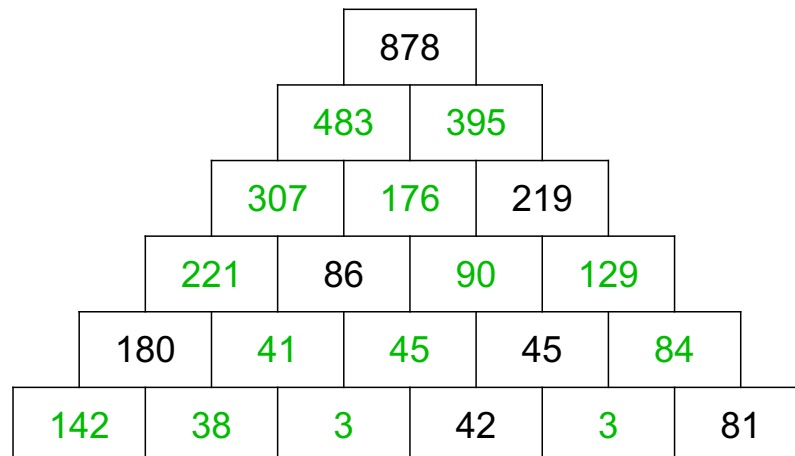




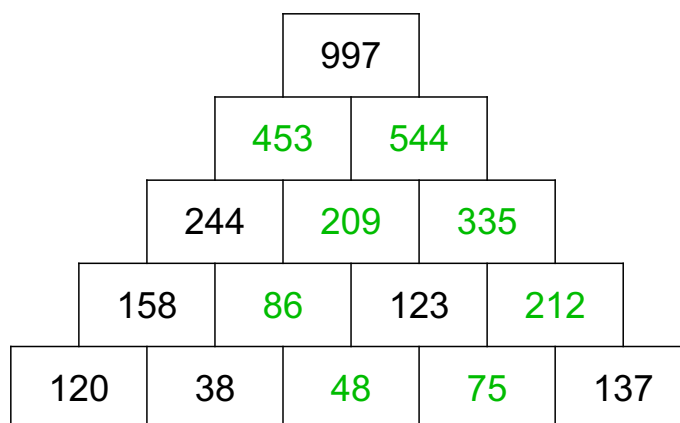
Trage die fehlenden Ergebnisse ein!  
Unten kannst Du vergleichen, ob Du alle Ergebnisse hast.



85, 766, 148, 159, 311, 226, 459, 63, 307, 96



129, 307, 395, 3, 142, 3, 483, 45, 176, 221, 84, 38, 41, 90



86, 453, 209, 48, 335, 212, 544, 75

